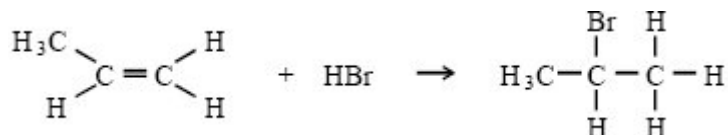


**Q1.**Organic reaction mechanisms help to develop an understanding of how and why reactions occur.

- (a) Propene reacts with hydrogen bromide by an electrophilic addition mechanism forming 2-bromopropane as the major product.

The equation for this reaction is shown below.



- (i) Outline the mechanism for this reaction, showing the structure of the intermediate carbocation formed.
- (ii) Give the structure of the alternative carbocation which could be formed in the reaction between propene and hydrogen bromide.

(5)

- (b) A substitution reaction occurs when 2-bromopropane reacts with aqueous sodium hydroxide.

- (i) Draw the structure of the organic product of this reaction and give its name.

*Structure*

Name .....

- (ii) Name and outline the mechanism for this reaction.

Name of mechanism .....

Mechanism

(5)

- (c) Under different conditions, 2-bromopropane reacts with sodium hydroxide to produce propene.

- (i) Name the mechanism for this reaction

.....

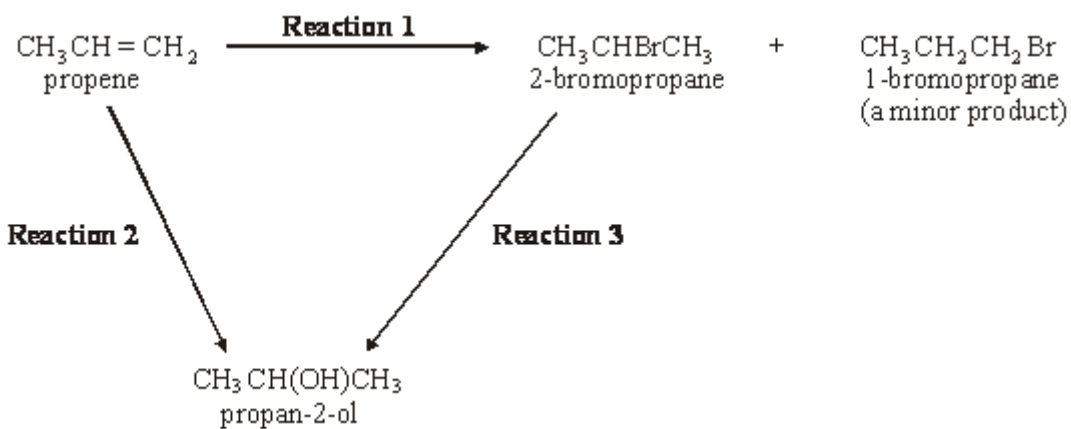
- (ii) State the role of sodium hydroxide in this reaction

.....

(2)

(Total 12 marks)

**Q2.** Consider the following reaction scheme.



- (a) (i) Name the mechanism for **Reaction 1**.

.....

(ii) Explain why 1-bromopropane is only a minor product in **Reaction 1**.

.....  
.....  
.....

(3)

(b) Give a suitable reagent and state the essential conditions required for **Reaction 3**.

*Reagent* .....

*Conditions* .....

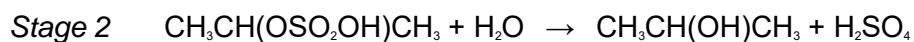
(2)

(c) The reagent used for **Reaction 3** can also be used to convert 2-bromopropane into propene. State the different conditions needed for this reaction.

.....

(1)

(d) **Reaction 2** proceeds in two stages.



(i) Name the class of alcohols to which propan-2-ol belongs.

.....

(ii) Outline a mechanism for Stage 1 of **Reaction 2**, using concentrated sulphuric acid.

(iii) State the overall role of the sulphuric acid in **Reaction 2**.

.....

(6)  
(Total 12 marks)

**Q3.** (a) In industry, ethanol is made from ethene in an acid-catalysed reaction. Name the type of reaction. Write an equation and identify a suitable catalyst for this reaction.

*Type of reaction*.....

*Equation*.....

*Catalyst* .....

(3)

(b) Ethanol burns completely in a plentiful supply of air, but incomplete combustion occurs if the air supply is limited.

(i) Identify a **solid** pollutant produced by burning ethanol in a limited supply of air.

.....

- (ii) Write an equation for the incomplete combustion of ethanol to produce the solid pollutant that you have identified in part (b)(i).

.....

(2)  
(Total 5 marks)

**Q4.** (a) Addition reactions to both alkenes and carbonyl compounds can result in the formation of isomeric compounds.

- (i) Choose an alkene with molecular formula  $C_4H_8$  which reacts with HBr to form two structural isomers. Give the structures of these two isomers and name the type of structural isomerism shown.

Outline a mechanism for the formation of the major product.

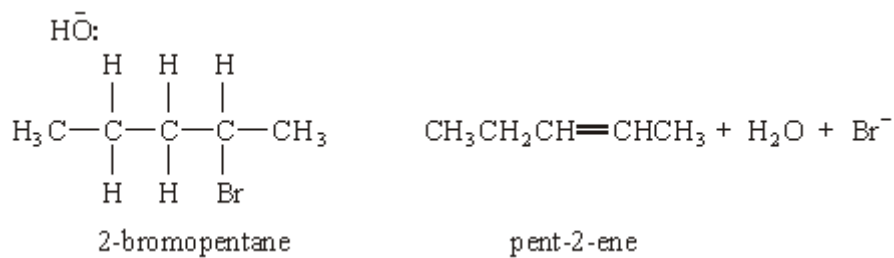
- (ii) Using HCN and a suitable carbonyl compound with molecular formula  $C_3H_6O$ , outline a mechanism for an addition reaction in which two isomers are produced.  
Give the structures of the two isomers formed and state the type of isomerism shown.

(14)

- (b) Explain why ethanoyl chloride reacts readily with nucleophiles.  
Write an equation for one nucleophilic addition–elimination reaction of ethanoyl chloride.  
(A mechanism is not required.)

(4)  
(Total 18 marks)

Q5. (a) Complete the mechanism below by drawing appropriate curly arrows.



(3)

(b) Draw and name the geometrical E-Z isomers of pent-2-ene.

*Isomer 1*

*Isomer 2*

Name .....

Name .....

(2)

(c) Pent-1-ene reacts with hydrogen bromide to produce 2-bromopentane as the major product.

(i) Outline the mechanism for this reaction.

(ii) Identify the minor product formed in this reaction.

.....

(iii) Explain why 2-bromopentane is the major product of this reaction.

.....

.....

.....

(7)  
(Total 12 marks)